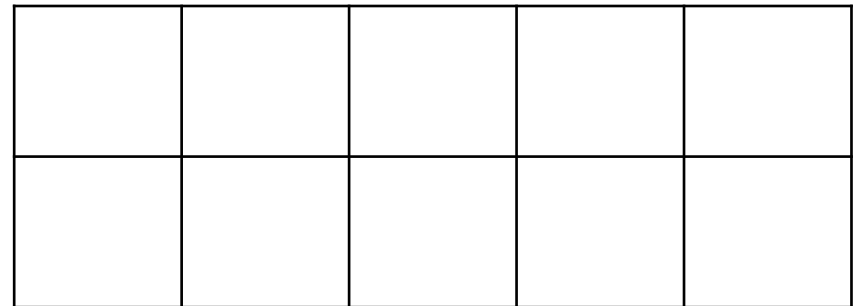
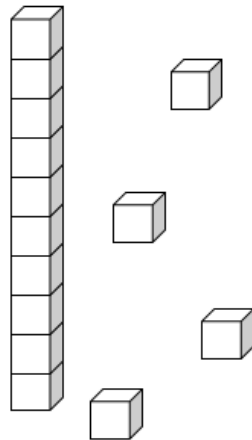


Ten Frame Teen Numbers

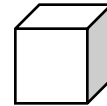
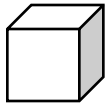
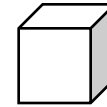
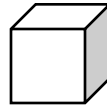
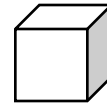
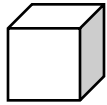
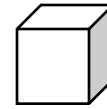
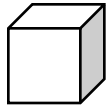
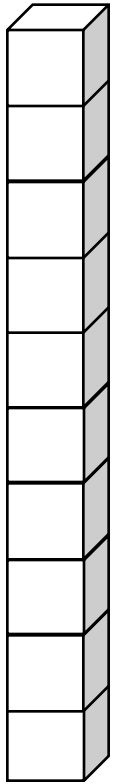
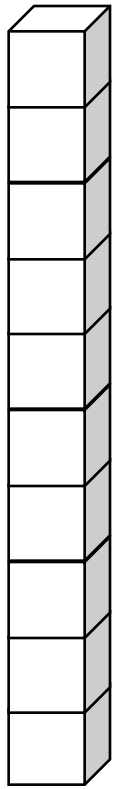
You will need: set of number cards, double ten frames, counters, "Teen Numbers" booklet, pencil

1. Pick up a number card.
2. Create that number on your double ten frame with the counters.
3. Record your thinking in your "Teen Number" booklet.



Teen Numbers (11-20)

11	12	13	14	15
16	17	18	19	20



My
Ten Frame
Teen Number
Book

By:

11

11 is one group
of ten and _____
more ones.

12

12 is one group
of ten and _____
more ones.

13

13 is one group
of ten and _____
more ones.

14

14 is one group
of ten and _____
more ones.

15

15 is one group
of ten and _____
more ones.

16

16 is one group
of ten and _____
more ones.

17

17 is one group
of ten and _____
more ones.

18

18 is one group
of ten and _____
more ones.

19

19 is one group
of ten and _____
more ones.

20

20 is _____
groups of ten.